



Représentation de FRACTIONS 2


Donne la fraction correspondant à la partie colorée de chaque figure :



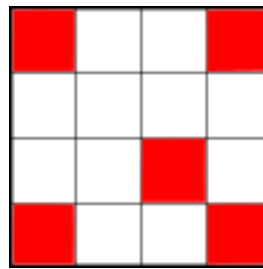
$\frac{\dots}{\dots}$




$\frac{\dots}{\dots}$



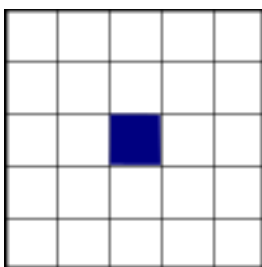
$\frac{\dots}{\dots}$




$\frac{\dots}{\dots}$




$\frac{\dots}{\dots}$




$\frac{\dots}{\dots}$




$\frac{\dots}{\dots}$



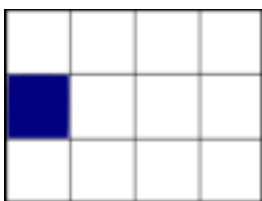
$\frac{\dots}{\dots}$




$\frac{\dots}{\dots}$



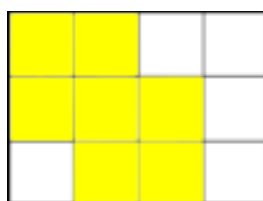
$\frac{\dots}{\dots}$




$\frac{\dots}{\dots}$



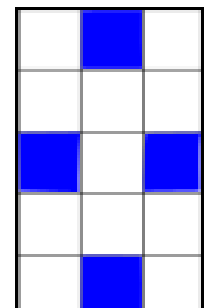
$\frac{\dots}{\dots}$



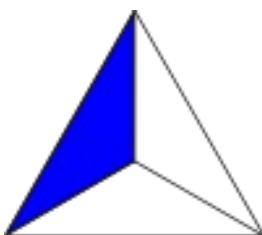
$\frac{\dots}{\dots}$



$\frac{\dots}{\dots}$



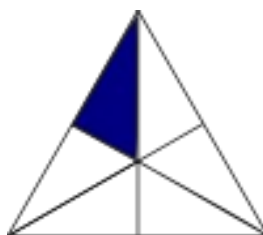
$\frac{\dots}{\dots}$



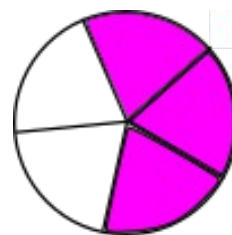
$\frac{\dots}{\dots}$



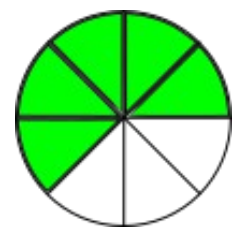
$\frac{\dots}{\dots}$



$\frac{\dots}{\dots}$



$\frac{\dots}{\dots}$



$\frac{\dots}{\dots}$