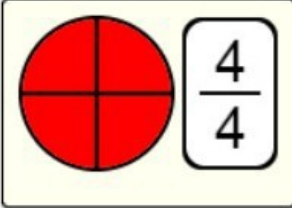
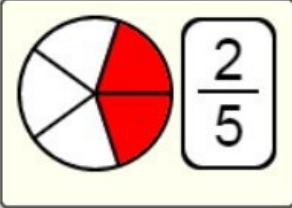
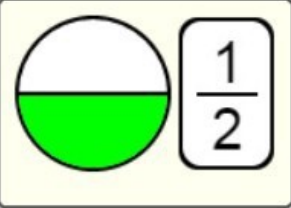
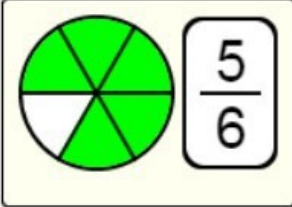
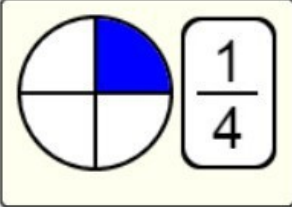
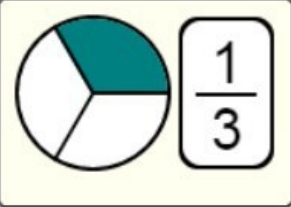
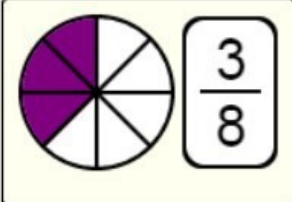
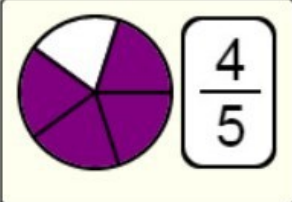
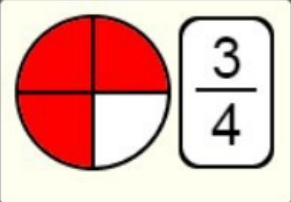


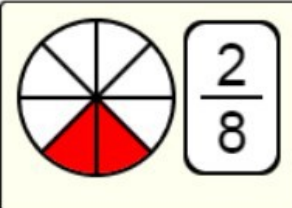
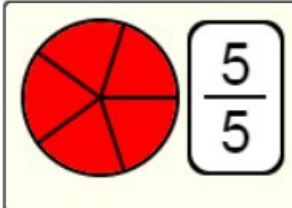
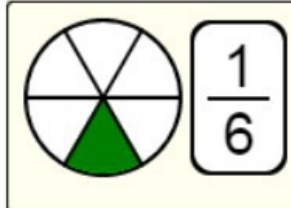
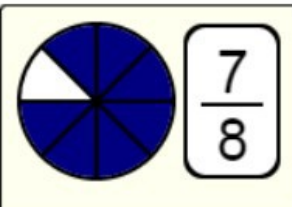
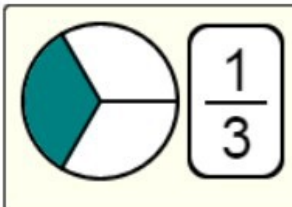
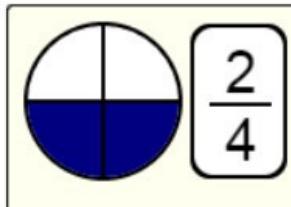
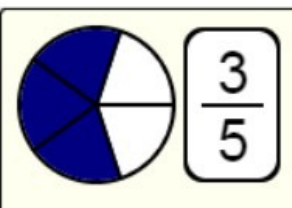
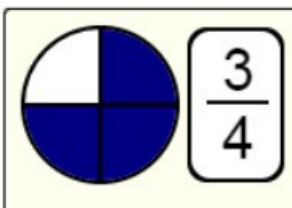
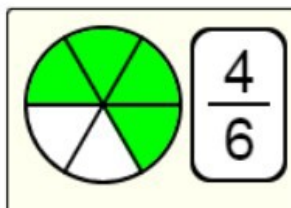
Représentation de FRACTIONS 1

Correction

1) Associe chaque fraction à la représentation correspondante :

$\frac{3}{4}$	$\frac{3}{8}$	$\frac{1}{2}$		$\frac{4}{4}$		$\frac{2}{5}$		$\frac{1}{2}$
$\frac{1}{3}$	$\frac{2}{5}$	$\frac{4}{5}$		$\frac{5}{6}$		$\frac{1}{4}$		$\frac{1}{3}$
$\frac{4}{4}$	$\frac{5}{6}$	$\frac{1}{4}$		$\frac{3}{8}$		$\frac{4}{5}$		$\frac{3}{4}$

2) Même exercice :

$\frac{5}{5}$	$\frac{3}{5}$	$\frac{1}{3}$		$\frac{2}{8}$		$\frac{5}{5}$		$\frac{1}{6}$
$\frac{1}{6}$	$\frac{2}{4}$	$\frac{3}{4}$		$\frac{7}{8}$		$\frac{1}{3}$		$\frac{2}{4}$
$\frac{7}{8}$	$\frac{4}{6}$	$\frac{2}{8}$		$\frac{3}{5}$		$\frac{3}{4}$		$\frac{4}{6}$