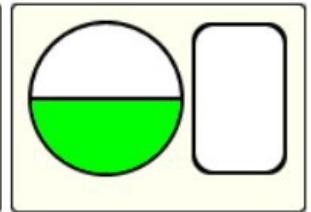
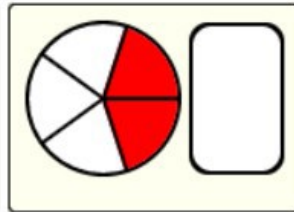
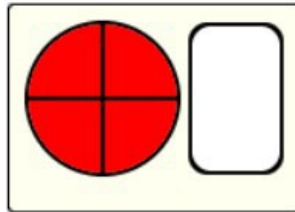


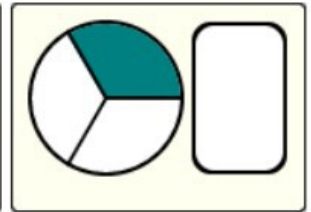
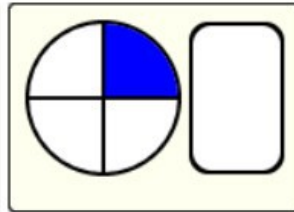
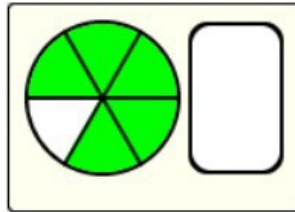
Représentation de FRACTIONS 1

1) Associe chaque fraction à la représentation correspondante :

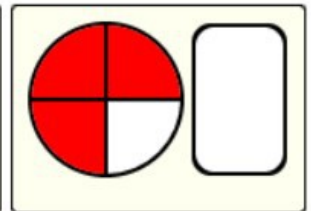
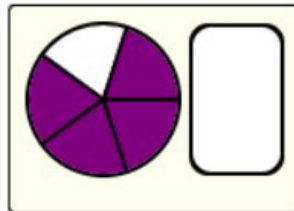
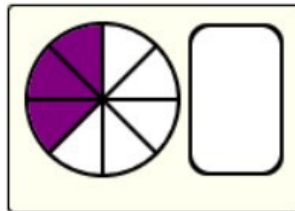
$$\frac{3}{4} \quad \frac{3}{8} \quad \frac{1}{2}$$



$$\frac{1}{3} \quad \frac{2}{5} \quad \frac{4}{5}$$

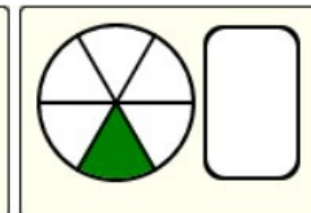
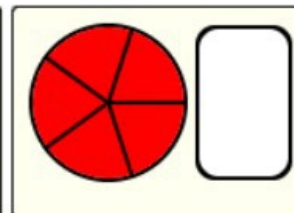
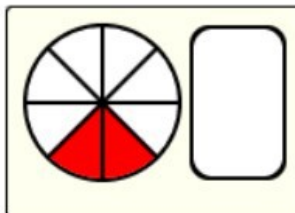


$$\frac{4}{4} \quad \frac{5}{6} \quad \frac{1}{4}$$

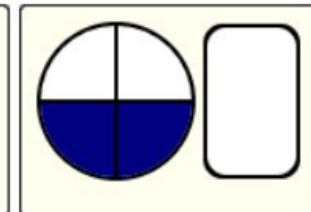
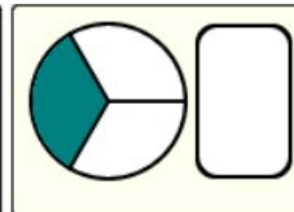
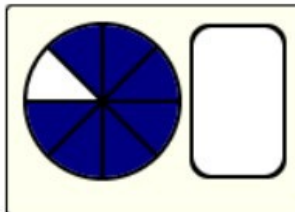


2) Même exercice :

$$\frac{5}{5} \quad \frac{3}{5} \quad \frac{1}{3}$$



$$\frac{1}{6} \quad \frac{2}{4} \quad \frac{3}{4}$$



$$\frac{7}{8} \quad \frac{4}{6} \quad \frac{2}{8}$$

